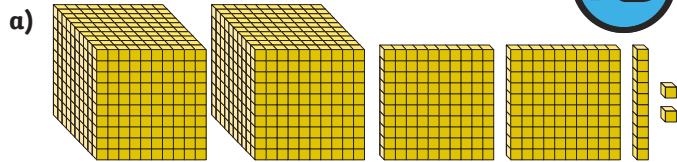
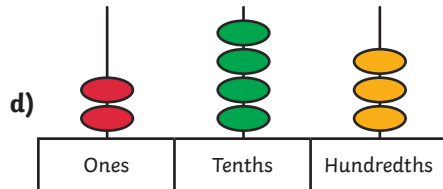


1) Put these decimals in ascending order.

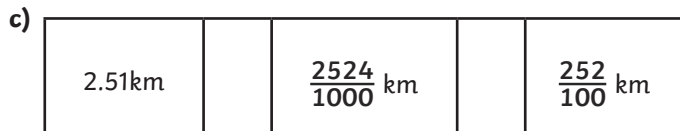

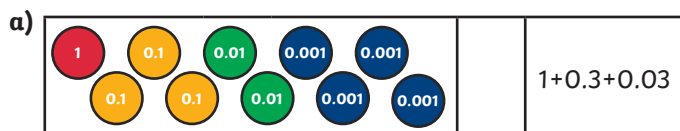


c) $2 + 0.4 + 0.009$



e) $\frac{2540}{1000}$

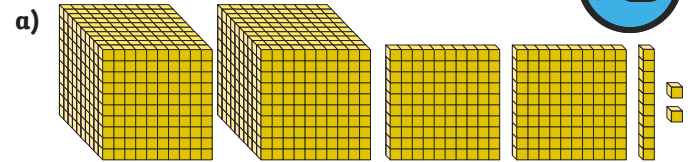
2) Complete these statements by using the correct symbol: $<$, $>$ or $=$.



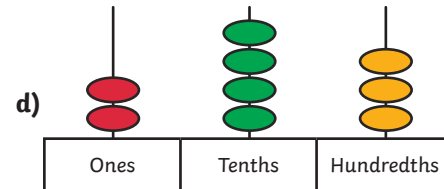
3) These decimals have been ordered smallest to largest. Write decimal numbers with up to 3 decimal places and draw representations to fill the gaps.

Visual Representation	Number
Smallest	1.199
Largest	

1) Put these decimals in ascending order.

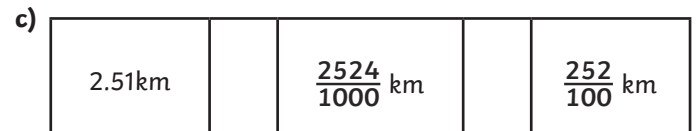

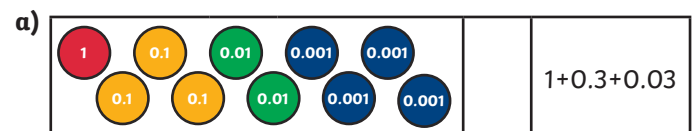


c) $2 + 0.4 + 0.009$



e) $\frac{2540}{1000}$

2) Complete these statements by using the correct symbol: $<$, $>$ or $=$.



3) These decimals have been ordered smallest to largest. Write decimal numbers with up to 3 decimal places and draw representations to fill the gaps.

Visual Representation	Number
Smallest	1.199
Largest	

- 1) Ian says 2.345 is greater than 2.4.
Ian is incorrect. Explain why.



- 2) Draw a number line like the one below in your book. You will need a way to generate random numbers: dice, digit cards or spinners would work. Playing with a partner, generate a decimal number between 1 and 2. You can order the digits however you wish.

1.

--

--

--

Place this on the number line. The first to get three decimal numbers in a row wins!



twinkl.com

- 1) Ian says 2.345 is greater than 2.4.
Ian is incorrect. Explain why.



- 2) Draw a number line like the one below in your book. You will need a way to generate random numbers: dice, digit cards or spinners would work. Playing with a partner, generate a decimal number between 1 and 2. You can order the digits however you wish.

1.

--

--

--

Place this on the number line. The first to get three decimal numbers in a row wins!



twinkl.com

- 1) Using each digit card only once, find 5 possible solutions that complete this statement.



1 2 2 3 3

2.

--

--

 5 < 2.

--

--

--

- 2) These decimal numbers are in ascending order. Put digits in the empty boxes to make the order correct.

a) 0.00, 0.00, 0.03, 0.1, 0.6

b) Now complete the decimals, using the digits 0-8 once only so that the decimal numbers are in ascending order.

0.00, 0.00, 0.03, 0.1, 0.6

twinkl.com

- 1) Using each digit card only once, find 5 possible solutions that complete this statement.



1 2 2 3 3

2.

--

--

 5 < 2.

--

--

--

- 2) These decimal numbers are in ascending order. Put digits in the empty boxes to make the order correct.

a) 0.00, 0.00, 0.03, 0.1, 0.6

b) Now complete the decimals, using the digits 0-8 once only so that the decimal numbers are in ascending order.

0.00, 0.00, 0.03, 0.1, 0.6

twinkl.com