




Geography

The UK

The UK

Rivers and Seas



Aim

- I can name and locate the main rivers and seas of the UK.
- I can identify rivers and seas using an atlas or map.

Success Criteria

- I can name the seas surrounding the UK.
- I can name some of the UK's main rivers.
- I can name the seas some rivers flow into.
- I can find the names of seas on a map.
- I can find the names of rivers on a map.
- I can follow a river on a map to find where it starts and ends.

What Surrounds Us?



? Where is the UK?

? Can you find Austria?

? On the map, how is the UK different to Austria?



The Seas Around Us



?

Do you know where each label should go?

?

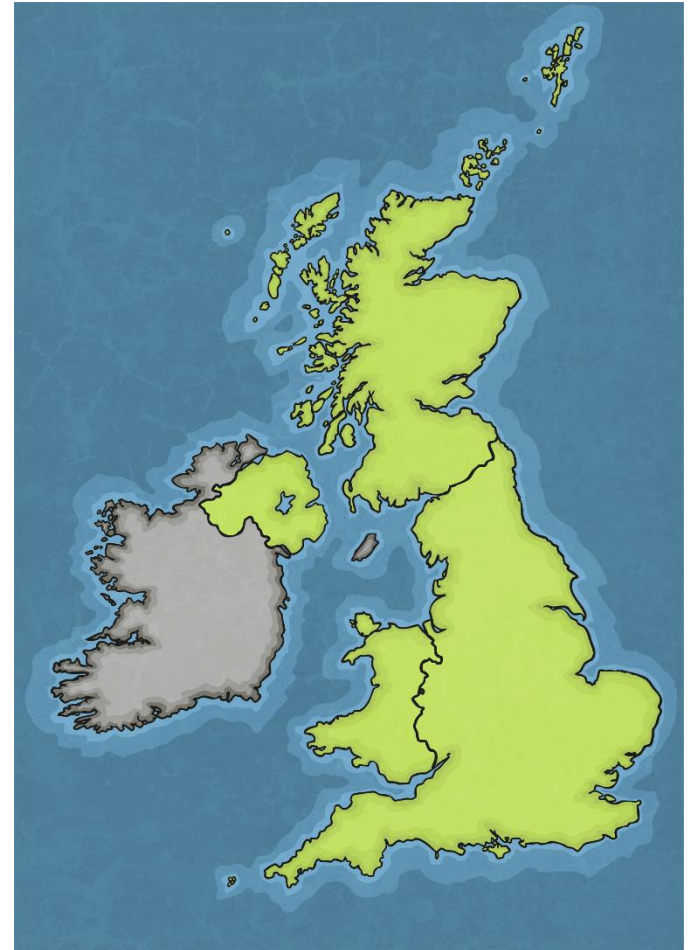
What clues might help us?

Irish Sea


English Channel

North Sea

Atlantic Ocean



Seas Around the UK



Use your atlas to find the names of the seas around the UK. Label your map carefully.



UK Seas and Rivers

I can name and locate the main rivers and seas of the UK.
I can identify rivers and seas using an atlas or map.

Complete the labels to show each of the seas around the UK.

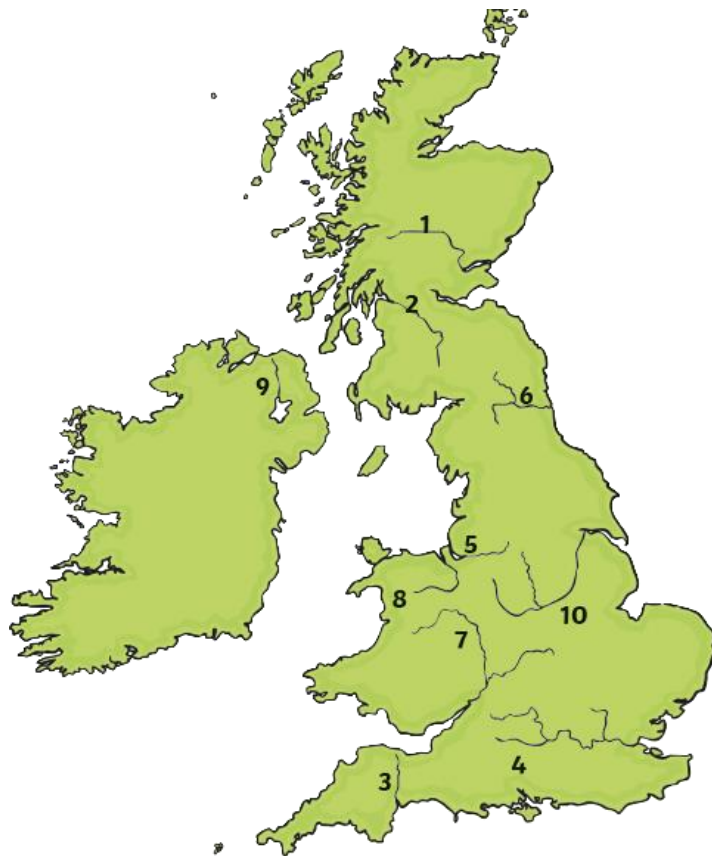
twinkl planit
twinkl.com

Geography | Year 3 | The UK | Rivers and Seas | Lesson 2

Rivers of the UK




Find out the names of the rivers labelled on your map of the UK.



? Which seas do they flow into?

Rivers of the UK



Find out the names of the rivers labelled on your map of the UK.

UK Seas and Rivers

Fill in the table below to show where each of these rivers are in the UK.

Number on map	Name of river
	Thames
	Severn
	Trent
	Tay
	Bann
	Tyne
	Clyde
	Dee
	Mersey
	Exe

twinkl planit
Geography | Year 3 | The UK | Rivers and Seas | Lesson 2

UK Seas and Rivers

Fill in the table below to show where each of these rivers are in the UK, and the sea that each one flows into.

Number on map	Name of river	Sea it flows into
	Thames	
	Severn	
	Trent	
	Tay	
	Bann	
	Tyne	
	Clyde	
	Dee	
	Mersey	
	Exe	

twinkl planit
Geography | Year 3 | The UK | Rivers and Seas | Lesson 2

UK Seas and Rivers

Fill in the table below to show where each of these rivers are in the UK, and the sea that each one flows into.

Number on map	Name of river	Sea it flows into
1		
2		
3		
4		
5		
6		
7		
8		
9		
10		

twinkl planit
Geography | Year 3 | The UK | Rivers and Seas | Lesson 2



Fill in the table to show where each of the rivers are in the UK.

Where Do Rivers Go?



?

Can you find the River Thames?

?

Where does it start?

?

Where does it end?

What do you notice about where the rivers start and end?



Aim



- I can name and locate the main rivers and seas of the UK.
- I can identify rivers and seas using an atlas or map.

Success Criteria

- I can name the seas surrounding the UK.
- I can name some of the UK's main rivers.
- I can name the seas some rivers flow into.
- I can find the names of seas on a map.
- I can find the names of rivers on a map.
- I can follow a river on a map to find where it starts and ends.



twinkl